

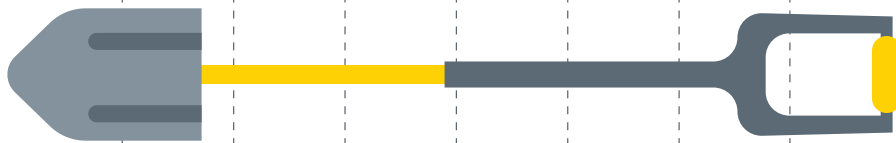
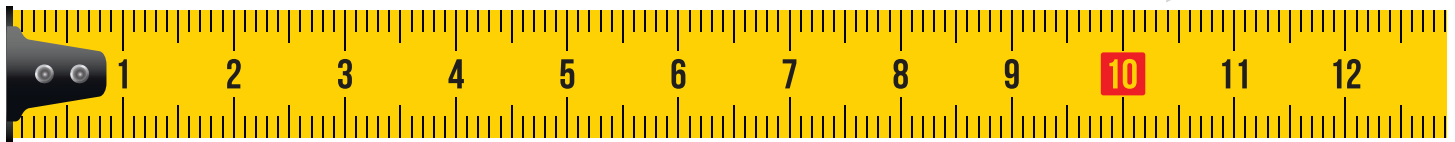


## Measuring Project


MATH: 2nd - 3rd Grade

Before Walter, the Central 70 Project pooch, starts work for the day, he needs your help measuring the width of each item below.\*


\*Not to scale



#1



#2



#3

#4

Find three other items around your house to measure and write the item and its measurement below. Use the ruler above, or one you have at home.

Item 1: \_\_\_\_\_ Width: \_\_\_\_\_

Item 2: \_\_\_\_\_ Width: \_\_\_\_\_

Item 3: \_\_\_\_\_ Width: \_\_\_\_\_

#5

Walter also needs your help adding up his friend's tools in their toolbelts:

Diego has 11 tools in his toolbelt.

Bianca has 14 tools in her toolbelt.

How many tools do they have together?